

Name: _____

Date: _____

HW # 20: Algebra 1 - Standard 11 - Graph Linear Functions

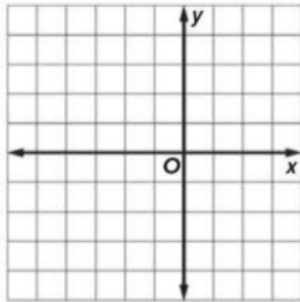
5 points

Graph each equation by making a table.

Show work needed to justify your answer.

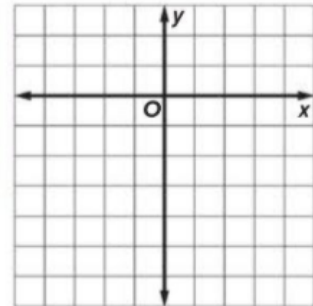
1. $x = -2$

x	y



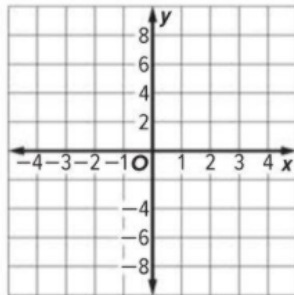
2. $y = -4$

x	y



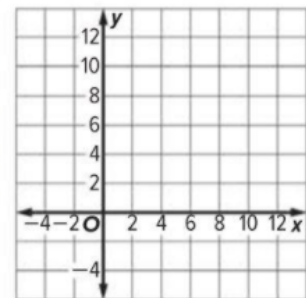
3. $y = -8x$

x	y



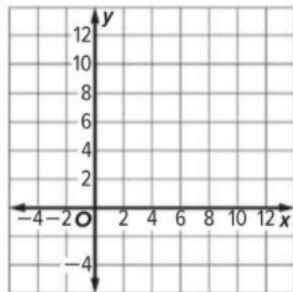
5. $y - 8 = -x$

x	y



6. $x = 10 - y$

x	y



7. $y = \frac{1}{2}x + 1$

x	y

