

Name: _____

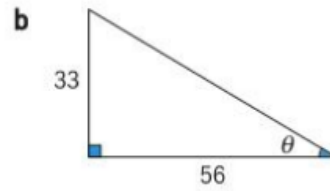
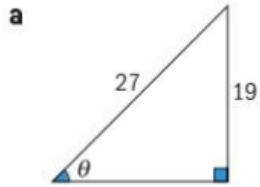
Show work needed to justify your answer.

Date: _____

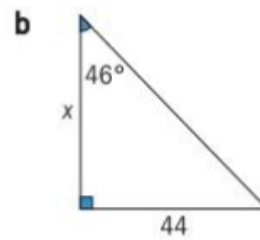
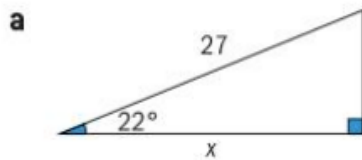
HW: # 42: Math IBSL - Standard 40 - Right Angled Trigonometry

5 points

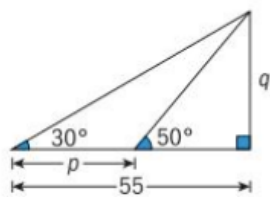
1 Find the value of θ :



2 Find the value of x :



4 Find the value of p and q :



5 Find the value of x :

